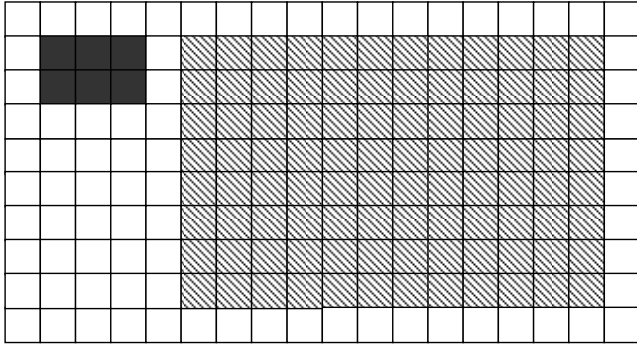


GWAITH CARTREF

PENNOD 31: HELAETHIADAU

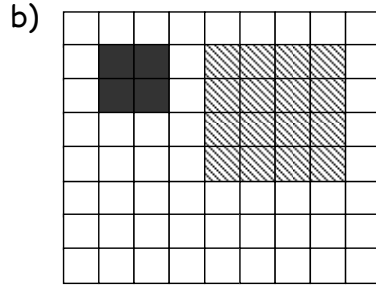
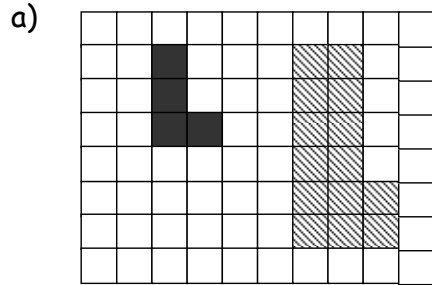
1. Beth yw factor graddfa yr helaethiad yma?



[1]

2. Edrychwch ar y parau sy'n dilyn. Ymhob par, ydy'n siap fwyaf yn helaethiad o'r siap llai? Rhowch rheswm dros eich ateb.


[3]



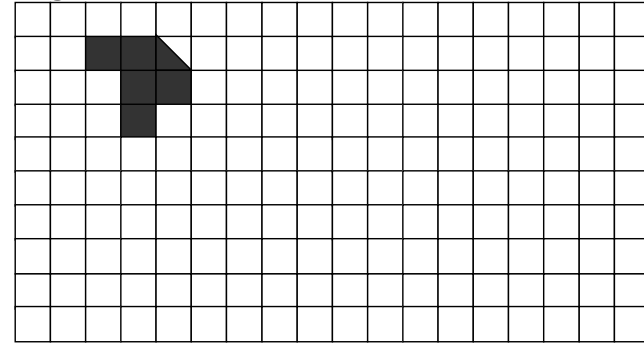
3. Lluniwch helaethiad o'r siâp a roddir.

a) Ffactor graddfa o 2

[2]




b) Ffactor graddfa o 3



[3]

4. Helaethwch gyda factor graddfa o 2. Gan ddefnyddio canolbwynt yr helaethiad a roddir.

[3]



5. I'r diagram isod, darganfyddwch (i) Ffactor graddfa yr helaethiad a (ii) canolbwynt yr helaethiad.

[2]

