

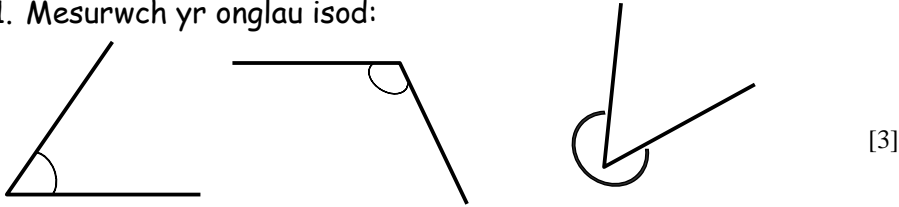
Clip: 12, 13

**GWAITH CARTREF**

Erbyn: \_\_\_\_\_

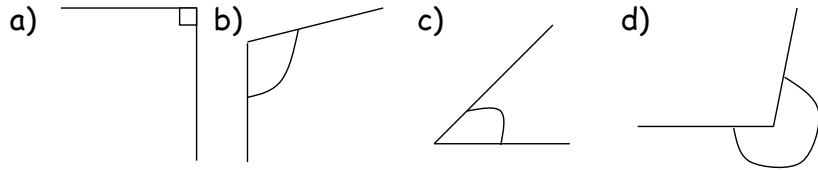
**PENNOD 22: ONGLAU, PWYNTIAU A LLINELLAU**

1. Mesurwch yr onglau isod:



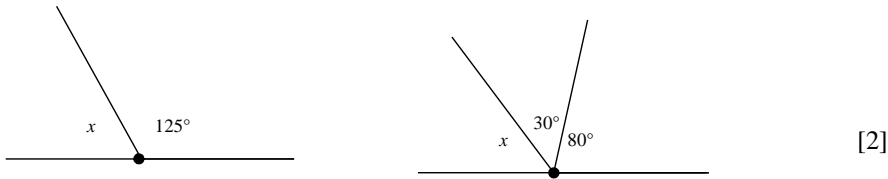
[3]

2. Pa fath o onglau ydy rhain? (Lem, Aflem, Sgwar, Atblyg?)



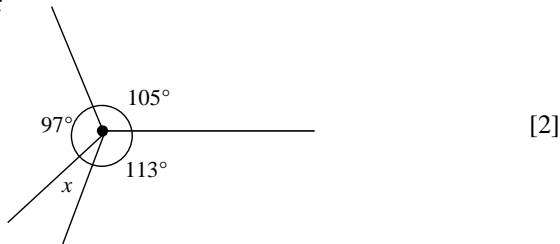
[4]

3. Cyfrifwch maint yr ongl  $x$  ac ongl  $y$  yn y diagramau isod



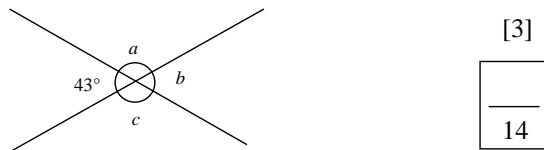
[2]

4. Cyfrifwch maint ongl  $x$



[2]

5. Cyfrifwch maint yr onglau a labelwyd



[3]



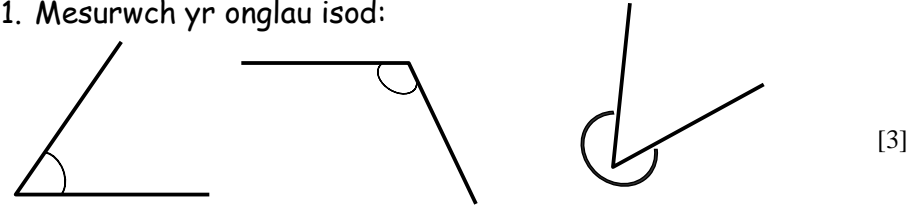
Clip: 12, 13

**GWAITH CARTREF**

Erbyn: \_\_\_\_\_

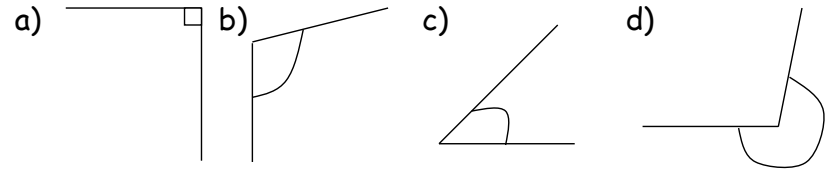
**PENNOD 22: ONGLAU, PWYNTIAU A LLINELLAU**

1. Mesurwch yr onglau isod:



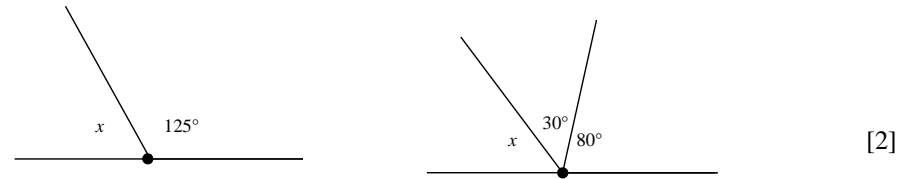
[3]

2. Pa fath o onglau ydy rhain? (Lem, Aflem, Sgwar, Atblyg?)



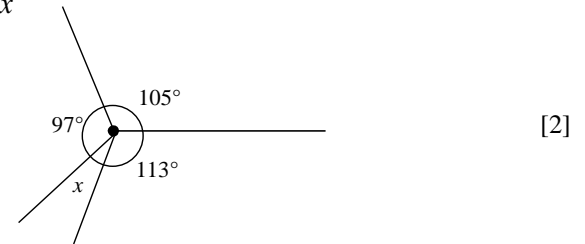
[4]

3. Cyfrifwch maint yr ongl  $x$  ac ongl  $y$  yn y diagramau isod



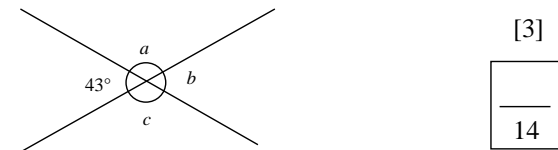
[2]

4. Cyfrifwch maint ongl  $x$



[2]

5. Cyfrifwch maint yr onglau a labelwyd



[3]