

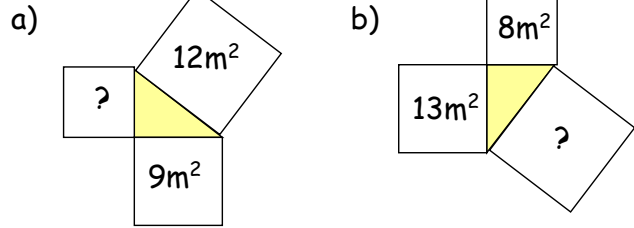


Erbyn: _____

GWAITH CARTREF

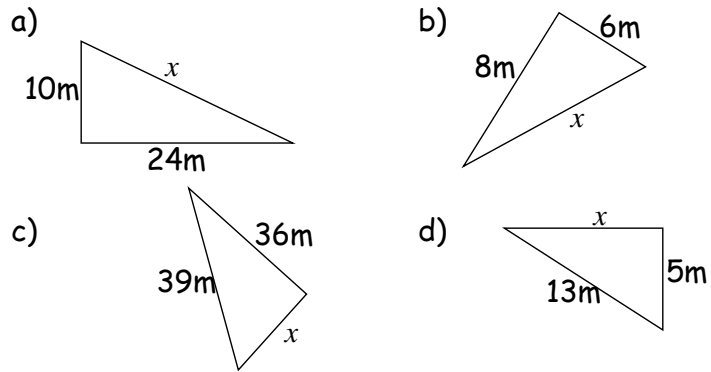
PENNOD 36: PYTHAGORAS

1. Darganfyddwch arwynebedd y trydydd sgwar



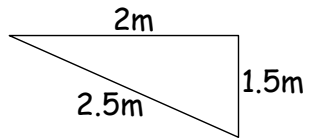
[2]

2. Darganfyddwch hyd ochr x .



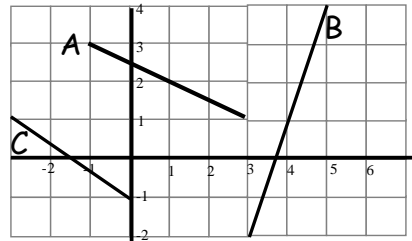
[8]

3. Ydy'r triongl isod yn triongl ongl sgwar? Defnyddiwch theorem Pythagoras!



[2]

4. Beth yw cyfesurynnau canolbwyt y llinellau isod:



[3]

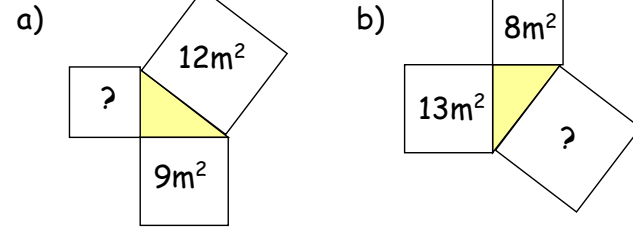


Erbyn: _____

GWAITH CARTREF

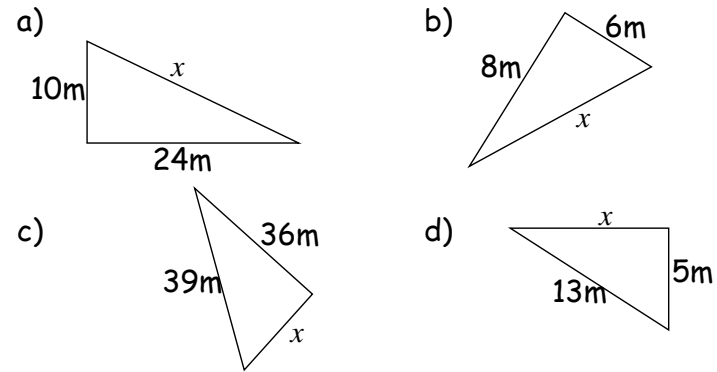
PENNOD 36: PYTHAGORAS

1. Darganfyddwch arwynebedd y trydydd sgwar



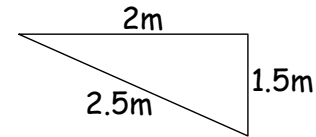
[2]

2. Darganfyddwch hyd ochr x .



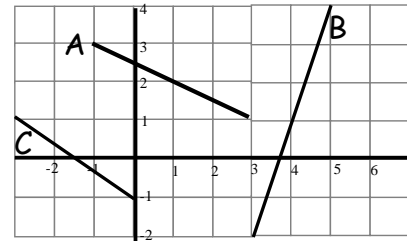
[8]

3. Ydy'r triongl isod yn triongl ongl sgwar? Defnyddiwch theorem Pythagoras!



[2]

4. Beth yw cyfesurynnau canolbwyt y llinellau isod:



[3]