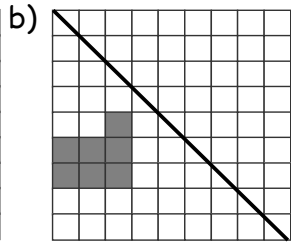
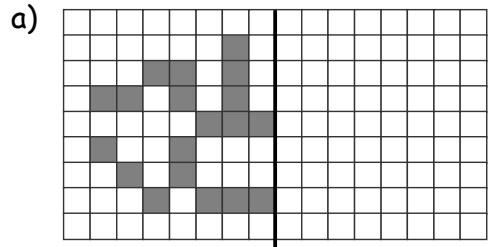


GWAITH CARTREF

PENNOD 30: TRAWFFURFIADAU 2

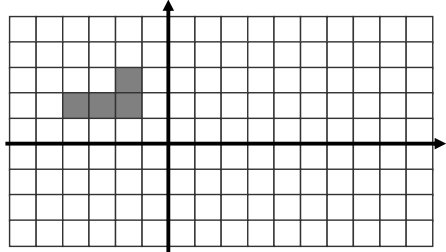
1. Adlewyrchwch y siapau yn llinell y drych isod



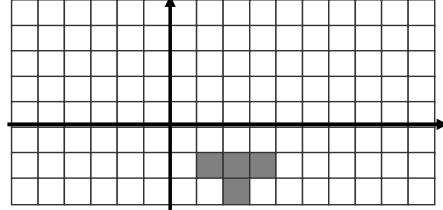
[4]

2. Cylchdrochwch y canlynol

a) 90° yn glocwedd o amgylch (0,0)



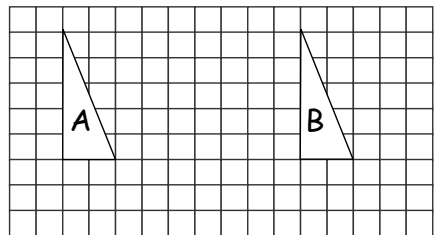
b) 90° yn wrth-glocwedd o amgylch y pwynt (0,0)



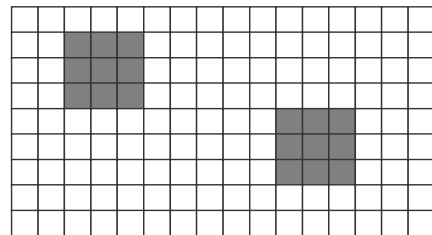
[4]

3. Disgrifiwch yn llawn y trawsffurfiad sengl sy'n mapio:

a) Triangl A ar ben triangl B.

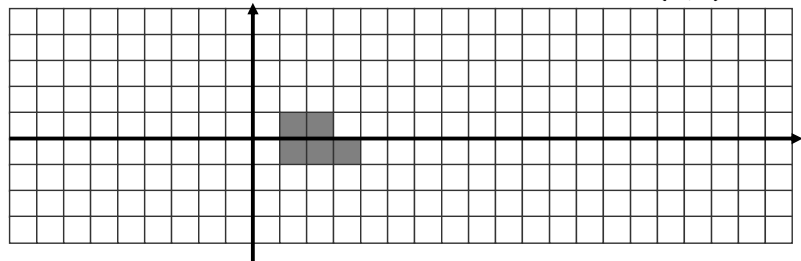


b) Sgwar C ar ben sgwar D



[3]

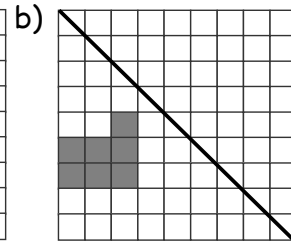
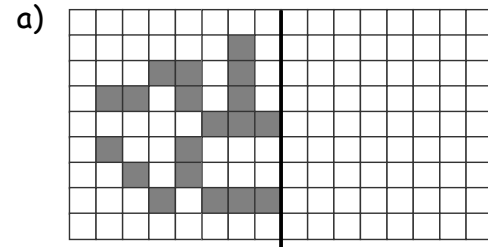
4. Helaethwch y siap isod gyda factor graddfa 2 o canolbwynt yr helaethiad (0,0) [2]



GWAITH CARTREF

PENNOD 30: TRAWFFURFIADAU 2

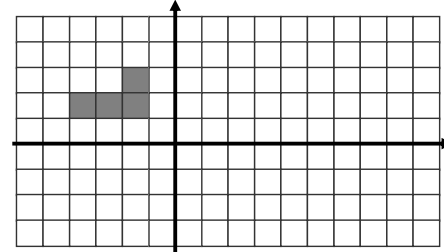
1. Adlewyrchwch y siapau yn llinell y drych isod



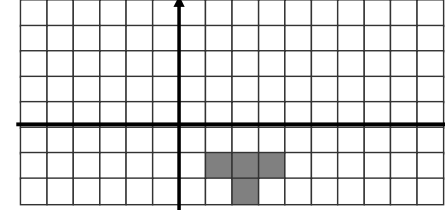
[4]

2. Cylchdrochwch y canlynol

a) 90° yn glocwedd o amgylch (0,0)



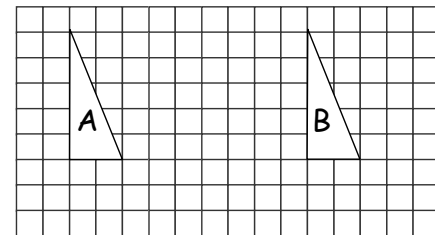
b) 90° yn wrth-glocwedd o amgylch y pwynt (0,0)



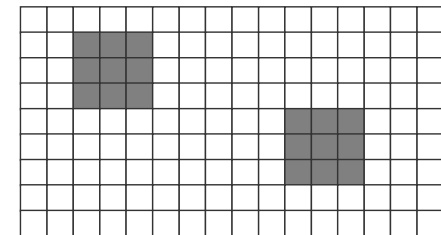
[4]

3. Disgrifiwch yn llawn y trawsffurfiad sengl sy'n mapio:

a) Triangl A ar ben triangl B.



b) Sgwar C ar ben sgwar D



[3]

4. Helaethwch y siap isod gyda factor graddfa 2 o canolbwynt yr helaethiad (0,0) [2]

