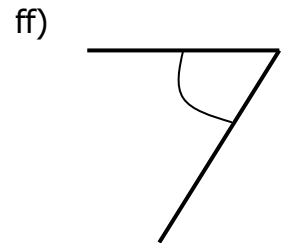
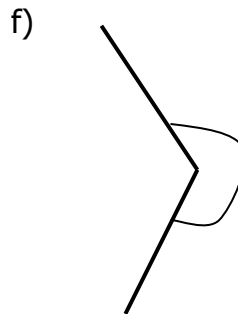
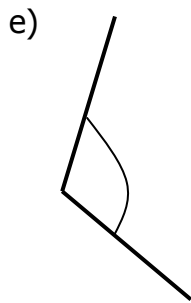
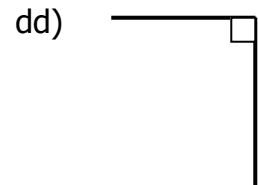
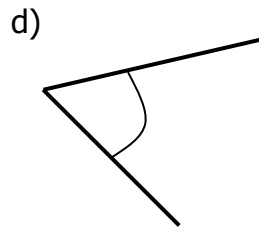
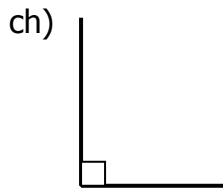
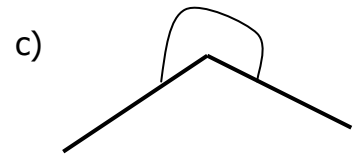
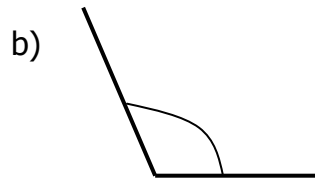
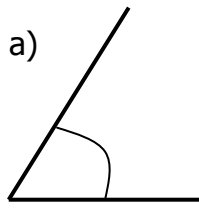


1. Beth yw'r enw a roddir ar yr onglau isod:




2. Mesurwch maint yr onglau yn cwestiwn 1.


3. Lluniwch onglau o'r maint a ddangosir isod, defnyddiwch y llinell a roddir.

a) 45°

b) 120°



c) 170°



ch) 270°

