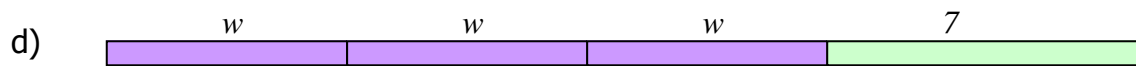
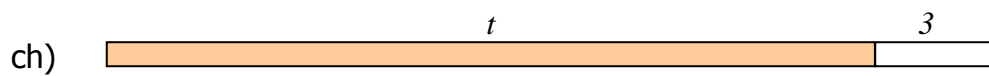
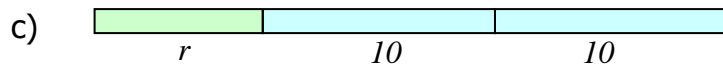
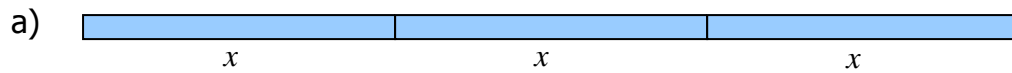


1. Ffurfiwch mynegiant algebraidd i ddynodi hyd yr llinellau canlynol:



2. Ffurfiwch mynegiant algebraidd i ddynodi perimedr y canlynol:

