

1. Darganfyddwch y dau term nesaf a nodwch y rheol:

a) 12, 15, 18, 21, 24, _____, _____

e) 2, 4, 6, 8, 10, _____, _____

b) 9, 11, 13, 15, 17, _____, _____

f) 6, 11, 16, 21, 26, _____, _____

c) 3, 6, 9, 12, 15, 18, _____, _____

ff) 11, 22, 33, 44, 55, _____, _____

ch) 0.2, 0.4, 0.6, 0.8, _____, _____

g) 80, 78, 76, 74, 72, _____, _____

d) 8, 15, 22, 29, 36, _____, _____

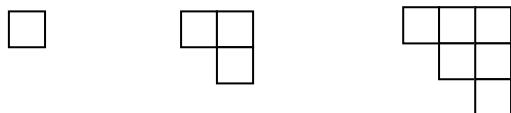
ng) 18, 28, 38, 48, 58, _____, _____

dd) -10, -5, 0, 5, 10, _____, _____

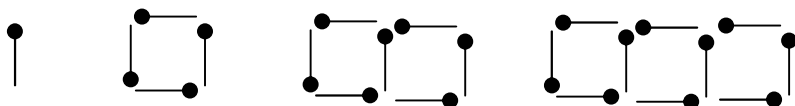
h) 1, 2, 4, 8, 16, _____, _____

2. Lluniwch y diagram nesaf ymhob un o'r dilyniannau hyn


a)



b)



c)



ch)

