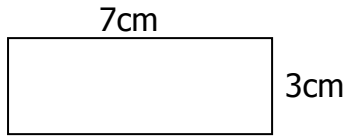
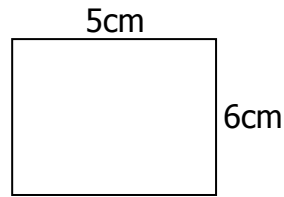


1. Cyfrifwch hyd perimetr y siapau isod:

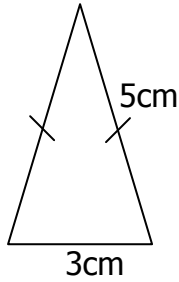
a)



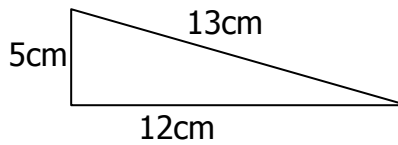
b)



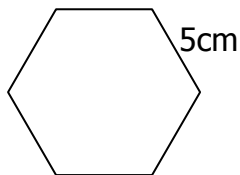
c)



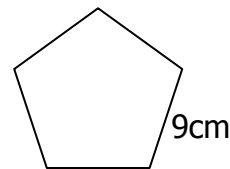
ch)



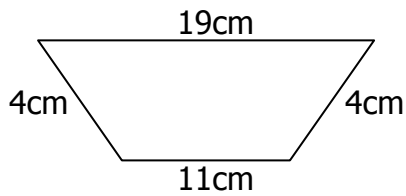
d)



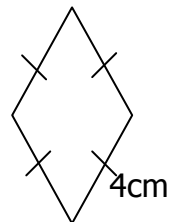
dd)



e)

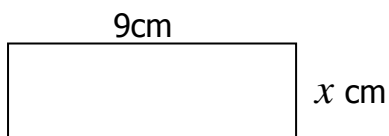


f)

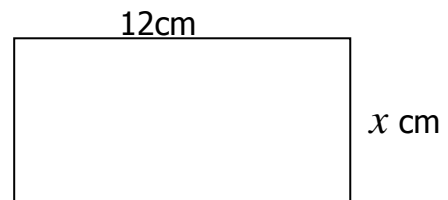


2. Cyfrifwch hyd yr ochr a labelwyd gyda  $x$ , os yw'r perimetr yn:

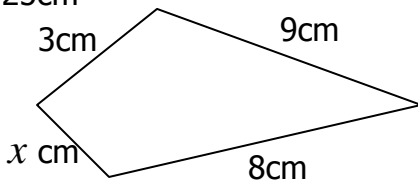
a) 30cm



b) 60cm



c) 25cm



ch) 32cm

