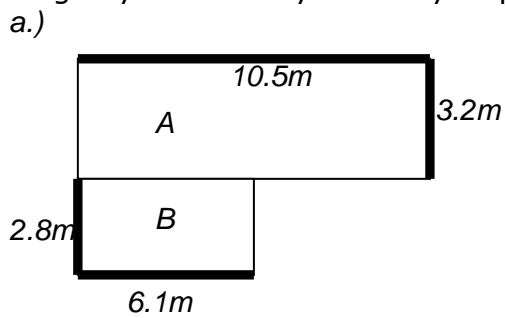
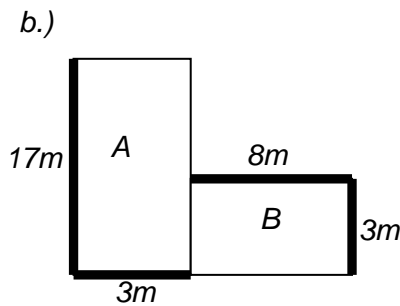


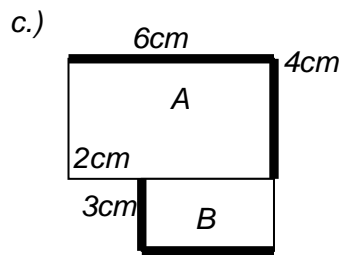
Clip 87: Arwynebedd Siapau Gyfansawdd 2
1. Darganfyddwch arwynebedd y siapau isod:.



A = _____
B = _____
Cyfanswm: _____



A = _____
B = _____
Cyfanswm: _____



A = _____
B = _____
Cyfanswm: _____

