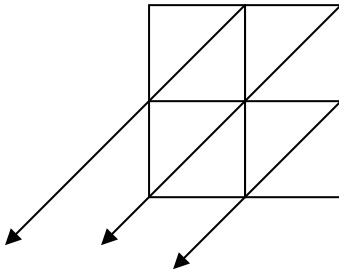
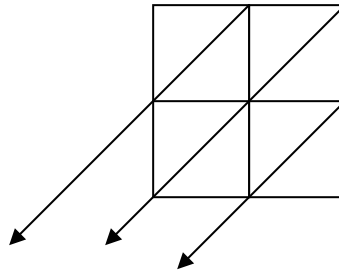


1. Cyfrifwch gwerth y canlynol, defnyddiwch dull 1:

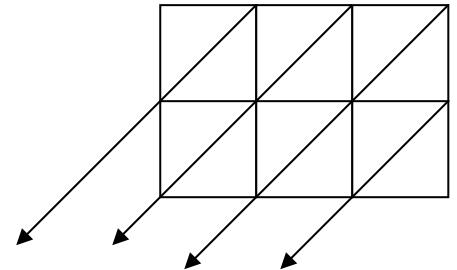
a) 36×23



b) 45×24



c) 873×251



ch) 49×34

d) 135×56

dd) 687×55

2. Cyfrifwch gwerth y canlynol, defnyddiwch dull 2:

a) 934×34

b) 646×234

c) 567×234

$$\begin{array}{r} \times \quad \quad \times \\ \hline \hline \end{array}$$

$$\begin{array}{r} \times \quad \quad \times \\ \hline \hline \end{array}$$

$$\begin{array}{r} \times \quad \quad \times \\ \hline \hline \end{array}$$

$$\begin{array}{r} + \\ \hline \hline \end{array}$$

$$\begin{array}{r} + \\ \hline \hline \end{array}$$

$$\begin{array}{r} + \\ \hline \hline \end{array}$$